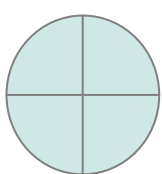
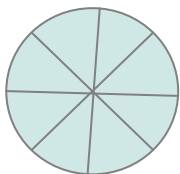


1) Pour chaque figure, colorie le nombre de parts correspondant à la fraction donnée :



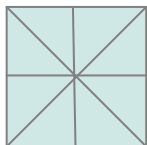
$$\frac{1}{4}$$



$$\frac{5}{8}$$



$$\frac{1}{2}$$

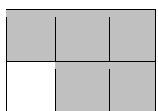


$$\frac{3}{8}$$

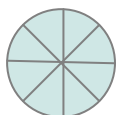


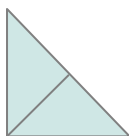
$$\frac{3}{6}$$

2) Pour chaque figure, indique la fraction correspondant au nombre de parts coloriées.



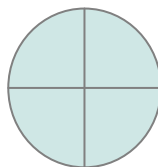




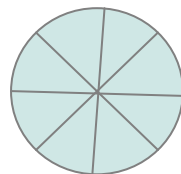




1) Pour chaque figure, colorie le nombre de parts correspondant à la fraction donnée :



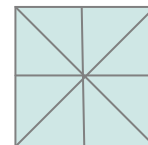
$$\frac{1}{4}$$



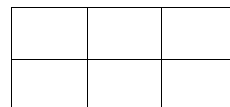
$$\frac{5}{8}$$



$$\frac{1}{2}$$



$$\frac{3}{8}$$



$$\frac{3}{6}$$

2) Pour chaque figure, indique la fraction correspondant au nombre de parts coloriées.

